

# RALG TANZANIA

## SHULE YA MSINGI

JARIBIO LA MWEZI

DARASA LA V:

SOMO: HISABATI (MUDA SAA 1:30)

1.  $819 + 246 =$

2.  $1942 - 303 =$

3.  $146 \times 18 =$

4.  $2\frac{1}{3} + 1\frac{1}{4} =$

5.  $14\frac{3}{5} - 8\frac{1}{3} =$

6.  $2\frac{3}{4} \times 1\frac{1}{2} =$

7.  $2.4 - 0.9 =$

8.  $\sqrt{144} =$

9. Andika namba mraba ya 21

10. Tafuta kipeuo cha pili cha 3600

11. Andika 164 kwa kirumi

12. Andika DCCCLXXXVII kwa namba za kawaida

13. Andika namba tasa zilizo kati ya 20 na 40

14. Tafuta KKS cha 34, 51 na 68

15. Andika KDS cha 12 na 16

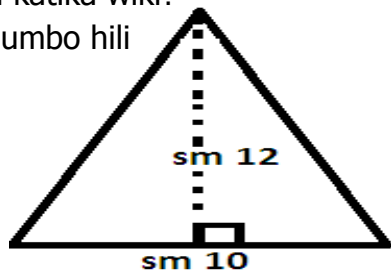
16. Andika tofauti kati  $\frac{6}{8}$  na  $\frac{2}{5} =$

17.  $27^2 =$

18. Gawanya miaka 17, wiki 8 kwa 4

19. Kuna saa ngapi katika wiki?

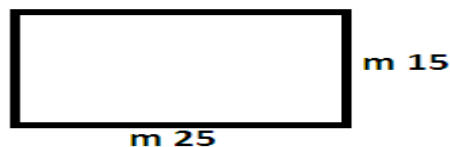
20. Tafuta eneo la umbo hili



21. Tafuta mzingo wa mraba wenye upande wa sm 42

22.  $X + 4 = 2x - 6$ . Tafuta thamani ya "X"

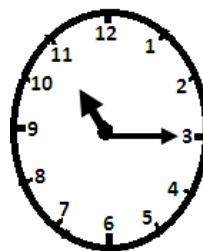
23. Tafuta mzingo wa umbo lifuatalo



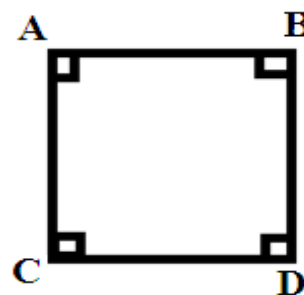
24. Andika 1 000 000 kwa maneno

25. Andika thamani ya namba iliyopigiwa mstari **842162**

26. Saa inaonyesha saa ngapi?



Kwa swali la 27, 28, 29, na 30, Taja Pembe zinazopataikana katika umbo hili



27. \_\_\_\_\_

28. \_\_\_\_\_

29. \_\_\_\_\_

30. \_\_\_\_\_

31. Shukuru alienda sokoni kununua vitu vifuatavyo Nyanya mafungu 3@250/=, Vitunguu 3@50/=, Sukari kilo 1@3000, Je, Jumla alilipa shilingi ngapi?

32. Darasa la tano walitumia  $\frac{3}{5}$  ya chakula, na Darasa la nne walitumia  $\frac{1}{5}$  ya chakula. Je, jumla walitumia sehemu gani ya chakula?

33. Chora majira ya nukta  $Q=(-1,-3)$ ,  $P=(2,3)$ , na  $R=(0,4)$  katika xy moja.